


Greater Than or Less Than

Look at each set of numbers. Then fill in the circle with $<$, $=$, or $>$.



Greater Than or Less Than

Look at each set of numbers. Then fill in the circle with $<$, $=$, or $>$.

○

○

○

○

○


○

○

○


○

○



Greater Than or Less Than

Look at each set of numbers. Then fill in the circle with $<$, $=$, or $>$.



Greater Than or Less Than

Look at each set of numbers. Then fill in the circle with $<$, $=$, or $>$.

○

○

○

○

○

○

○

○

○

○



Greater Than or Less Than

Look at each set of numbers. Then fill in the circle with $<$, $=$, or $>$.

○

○

○

○

○


○

○

○

○

○



Greater Than or Less Than

Look at each set of numbers. Then fill in the circle with $<$, $=$, or $>$.

○

○

○

○

○


○

○

○

○

○



Greater Than or Less Than

Look at each set of numbers. Then fill in the circle with $<$, $=$, or $>$.

○

○

○

○

○


○

○

○

○

○



Greater Than or Less Than

Look at each set of numbers. Then fill in the circle with $<$, $=$, or $>$.

○

○

○

○

○

○

○

○

○

○

